

Algebra 1 ECA Remediation  
Homework 7.1

Name Answer Key

What is the domain and range of the relation shown in the table provided? Determine if the relation is a function.

1.

x	y
-2	-6
0	-3
2	1
4	5

Domain:  $\{-2, 0, 2, 4\}$

Range:  $\{-6, -3, 1, 5\}$

Function? Yes

2.

x	y
1	-2
3	-1
3	1
4	2

Domain:  $\{1, 3, 4\}$

Range:  $\{-2, -1, 1, 2\}$

Function? No

3.

x	y
-4	2
2	5
3	8
2	11

Domain:  $\{-4, 2, 3\}$

Range:  $\{2, 5, 8, 11\}$

Function? No

Determine which set of ordered pairs represent a function.

4.  $\{(2, 4), (3, 5), (4, 4), (7, 5)\}$  function

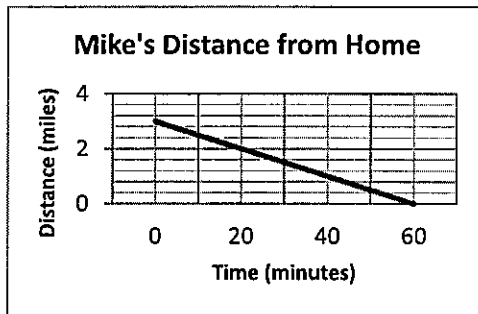
5.  $\{(2, 7), (2, 5), (4, 3), (9, 1)\}$  Not a function

6.  $\{(-3, 14), (3, 7), (-3, 9), (17, 15)\}$  Not a function

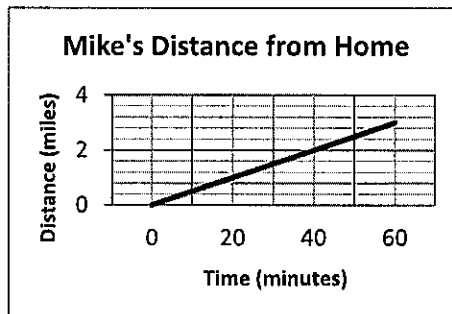
7.  $\{(12, 6), (13, 5), (3, 4), (8, 6)\}$  function

8. Mike ran from his home to the grocery store at a constant speed. He immediately turned around and ran back home, but at a slower constant speed. Mike ran along a straight path to and from the grocery store. Which graph best represents Mike's distance from his home over time?

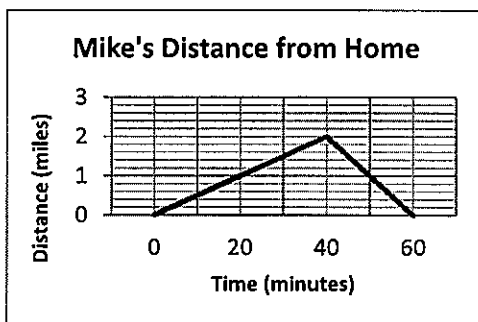
A.



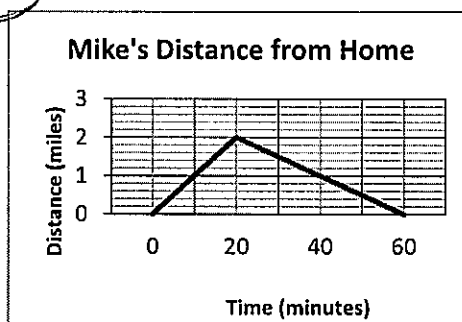
B.



C.



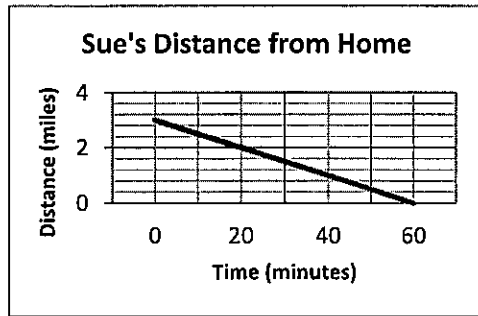
D.



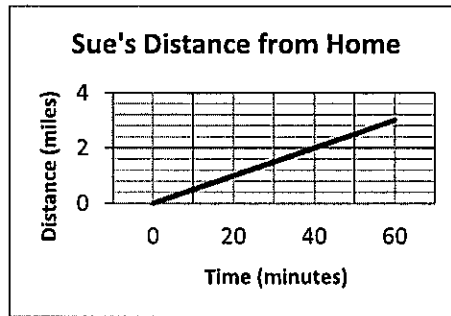
Store  
Home Home  
fast then slow  
steep then shallow

9. Sue rode her bike from home to school at a constant speed. Sue rode her bike along a straight path to school. Which graph best represents Sue's distance from her home over time?

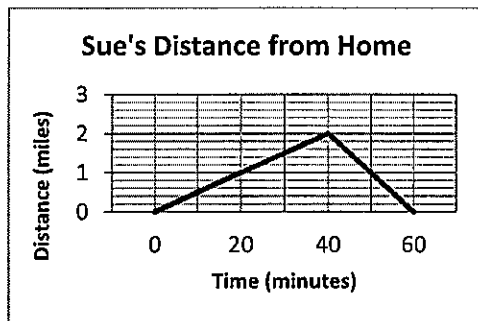
A.



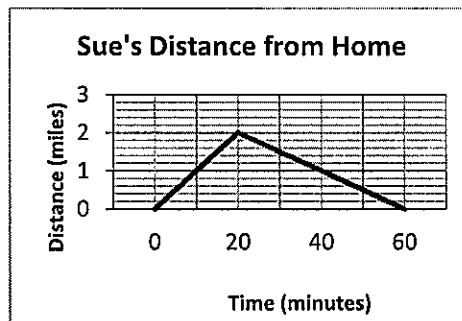
B.



C.



D.



School  
/ Home  
no turning around  
one way trip

In each of the following problems, a linear equation has been solved incorrectly. You need to determine where the mistake was made and then solve the equation for the correct answer.

10.  $2x - 1 = 3(x - 17) - 2x$      $2x - 1 = 3(x - 17) - 2x$     11.  $5 + 3x = 4(x - 25) - 2x$      $5 + 3x = 4(x - 25) - 2x$

$2x - 1 = 3x - 51 - 2x$      $2x - 1 = 3x - 51 - 2x$      $5 + 3x = 4x - 25 - 2x$      $5 + 3x = 4x - 100 - 2x$

$2x - 1 = 5x - 51$      $2x - 1 = x - 51$      $5 + 3x = 2x - 25$      $5 + 3x = 2x - 100$

$-1 = 3x - 51$      $-x \quad -x$      $5 + x = -25$      $5 + x = -100$

$50 = 3x$      $x - 1 = -51$      $x = -30$      $-5 \quad -5$

$50/3 = x$      $+1 \quad +1$      $x = -105$

$x = -50$

$3x - 2x = x$  not  $3x + 2x = 5x$

When simplify the right side,  
you should have subtracted  $2x$   
instead of adding  $2x$ .

$x = -50$

Should have distributed the four  
to the  $-25$  in the first step

$x = -105$

Answers:

1. Domain:  $\{-2, 0, 2, 4\}$

2. Domain:  $\{1, 3, 4\}$

3. Domain:  $\{-4, 2, 3\}$

Range:  $\{-6, -3, 1, 5\}$

Range:  $\{-2, -1, 1, 2\}$

Range:  $\{2, 5, 8, 11\}$

Function? yes

Function? no

Function? No

4. Function

5. Not a Function

6. Not a Function

7. Function

8. D.

9. B

10. Combined like terms incorrectly, -50

11. Distributed incorrectly, -105